


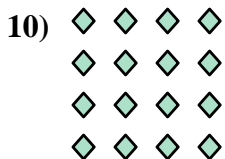
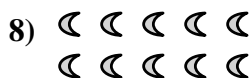

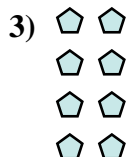
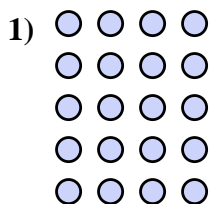
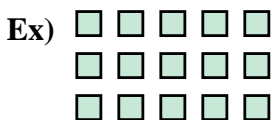




Write each array as an addition problem and solve.



Answers

Ex. $5+5+5=15$

1. _____

2. _____

3. _____

4. _____

5. _____

6. _____

7. _____

8. _____

9. _____

10. _____

11. _____







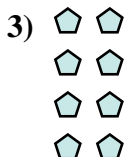
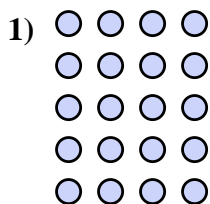
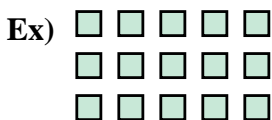
12. _____

13. _____

14. _____



Write each array as an addition problem and solve.



Answers

Ex. $5+5+5=15$

1. $4+4+4+4+4=20$

2. $5+5+5+5+5=25$

3. $2+2+2+2=8$

4. $3+3=6$

5. $3+3+3+3=12$

6. $3+3+3+3+3=15$

7. $4+4=8$

8. $5+5=10$

9. $2+2=4$

10. $4+4+4+4=16$

11. $3+3+3=9$


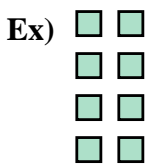
12. $4+4+4=12$

13. $5+5+5+5=20$

14. $2+2+2+2+2=10$



Write each array as an addition problem and solve.



Answers

Ex. $2+2+2+2=8$

1. _____

2. _____

3. _____

4. _____

5. _____

6. _____

7. _____

8. _____

9. _____


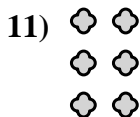
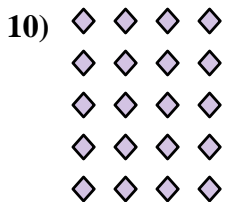



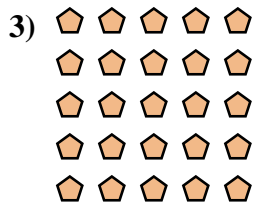
10. _____

11. _____

12. _____


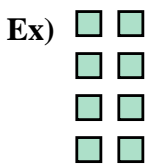
13. _____

14. _____





Write each array as an addition problem and solve.



Answers

Ex. 2+2+2+2=8

1. 5+5+5+5=20

2. 2+2+2+2+2=10

3. 5+5+5+5+5=25

4. 5+5=10

5. 5+5+5=15

6. 3+3+3=9

7. 4+4+4=12

8. 4+4=8

9. 3+3+3+3=12


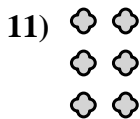
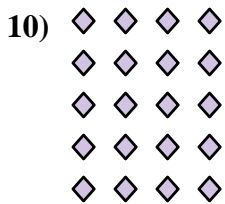



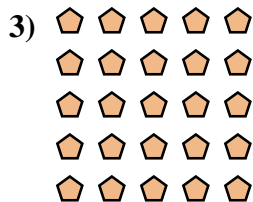
10. 4+4+4+4+4=20

11. 2+2+2=6

12. 2+2=4


13. 3+3+3+3+3=15

14. 4+4+4+4=16





Write each array as an addition problem and solve.



Answers

Ex. 5+5=10

1. _____

2. _____

3. _____

4. _____

5. _____

6. _____

7. _____

8. _____

9. _____


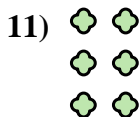
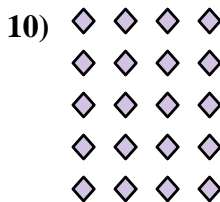
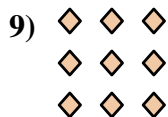
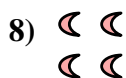
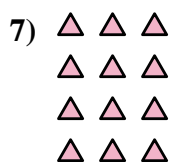



10. _____

11. _____

12. _____


13. _____

14. _____





Write each array as an addition problem and solve.



Answers

Ex. 5+5=10

1. 3+3=6

2. 2+2+2+2=8

3. 5+5+5+5=20

4. 5+5+5+5+5=25

5. 4+4+4+4=16

6. 2+2+2+2+2=10

7. 3+3+3+3=12

8. 2+2=4

9. 3+3+3=9


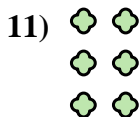
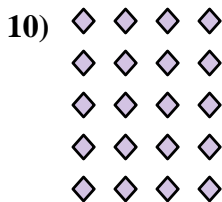
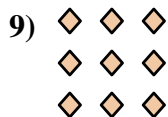
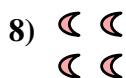


10. 4+4+4+4+4=20

11. 2+2+2=6

12. 4+4+4=12

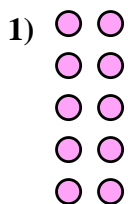
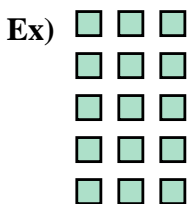
13. 3+3+3+3+3=15

14. 5+5+5=15





Write each array as an addition problem and solve.



Answers

Ex. $3+3+3+3+3=15$

1. _____

2. _____

3. _____

4. _____

5. _____

6. _____

7. _____

8. _____

9. _____

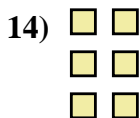
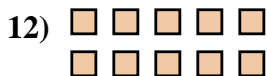
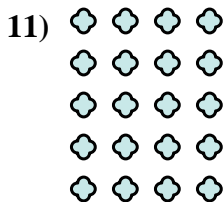

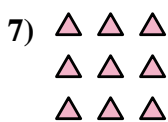
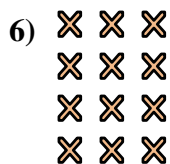

10. _____

11. _____

12. _____


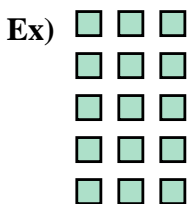
13. _____

14. _____





Write each array as an addition problem and solve.



Answers

Ex. 3+3+3+3+3=15

1. 2+2+2+2+2=10

2. 4+4+4+4=16

3. 4+4=8

4. 5+5+5+5=20

5. 5+5+5+5+5=25

6. 3+3+3+3=12

7. 3+3+3=9

8. 4+4+4=12

9. 2+2+2+2=8

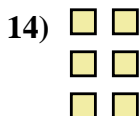
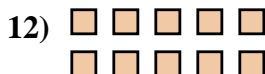
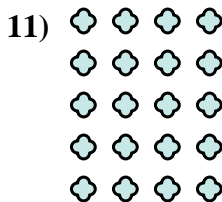
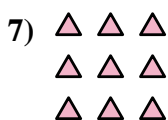


10. 2+2=4

11. 4+4+4+4+4=20

12. 5+5=10

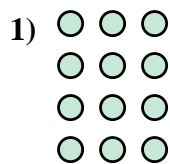
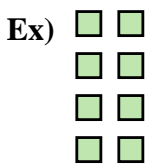
13. 5+5+5=15

14. 2+2+2=6





Write each array as an addition problem and solve.



Answers

Ex. $2+2+2+2=8$

1. _____

2. _____

3. _____

4. _____

5. _____

6. _____

7. _____

8. _____

9. _____


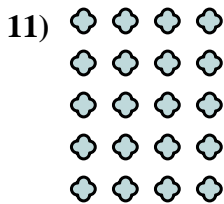


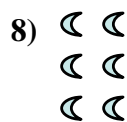
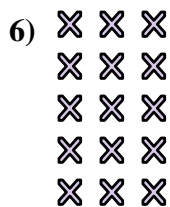
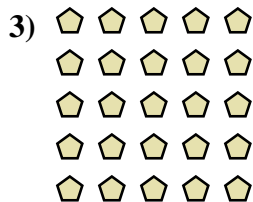
10. _____

11. _____

12. _____

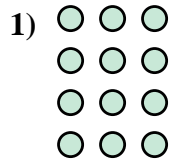
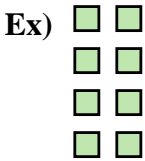
13. _____

14. _____





Write each array as an addition problem and solve.



Answers

Ex. 2+2+2+2=8

1. 3+3+3+3=12

2. 3+3+3=9

3. 5+5+5+5+5=25

4. 2+2+2+2+2=10

5. 3+3=6

6. 3+3+3+3+3=15

7. 4+4+4+4=16

8. 2+2+2=6

9. 5+5+5=15



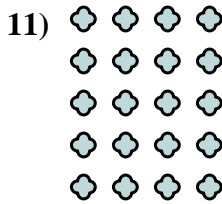


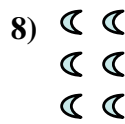
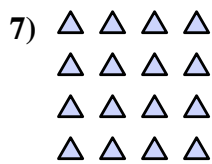

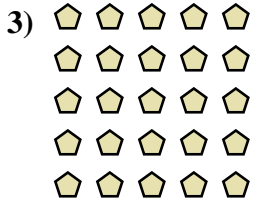
10. 4+4+4=12

11. 4+4+4+4+4=20

12. 2+2=4


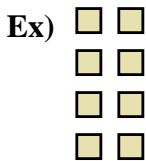
13. 5+5+5+5=20

14. 5+5=10





Write each array as an addition problem and solve.



Answers

Ex. $2+2+2+2=8$

1. _____

2. _____

3. _____

4. _____

5. _____

6. _____

7. _____

8. _____

9. _____

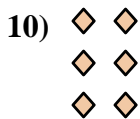

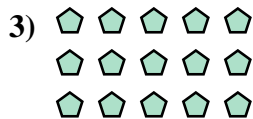
10. _____

11. _____

12. _____


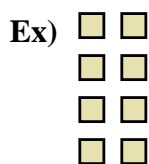
13. _____

14. _____





Write each array as an addition problem and solve.



Answers

Ex. 2+2+2+2=8

1. 3+3+3=9

2. 5+5+5+5=20

3. 5+5+5=15

4. 4+4+4+4+4=20

5. 4+4+4+4=16

6. 5+5=10

7. 4+4=8

8. 3+3+3+3+3=15

9. 2+2=4

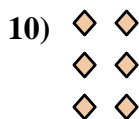


10. 2+2+2=6

11. 3+3=6

12. 5+5+5+5+5=25


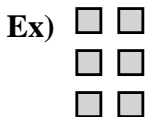
13. 2+2+2+2+2=10

14. 4+4+4=12





Write each array as an addition problem and solve.



Answers

Ex. $2+2+2=6$

1. _____

2. _____

3. _____

4. _____

5. _____

6. _____

7. _____

8. _____

9. _____



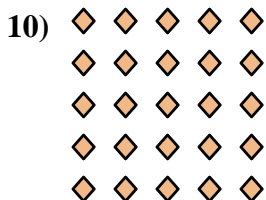


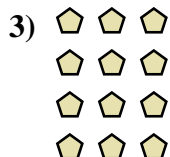
10. _____

11. _____

12. _____


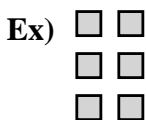
13. _____

14. _____





Write each array as an addition problem and solve.



Answers

Ex. $2+2+2=6$

1. $4+4+4=12$

2. $3+3+3+3+3=15$

3. $3+3+3+3=12$

4. $5+5+5=15$

5. $3+3+3=9$

6. $2+2+2+2+2=10$

7. $2+2+2+2=8$

8. $5+5=10$

9. $3+3=6$


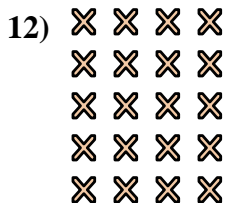
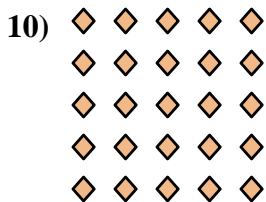

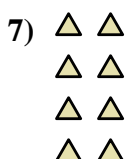

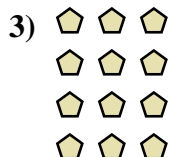
10. $5+5+5+5+5=25$

11. $2+2=4$

12. $4+4+4+4+4=20$

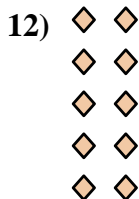
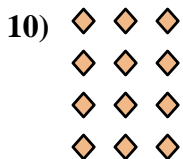
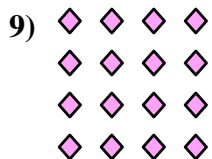


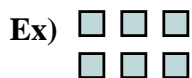
13. $4+4=8$

14. $4+4+4+4=16$





Write each array as an addition problem and solve.



Answers

Ex. $3+3=6$

1. _____

2. _____

3. _____

4. _____

5. _____

6. _____

7. _____

8. _____

9. _____

10. _____

11. _____

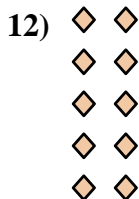
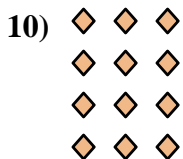
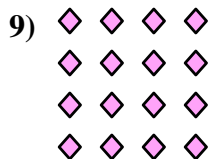

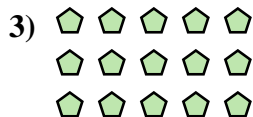

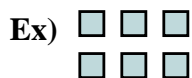
12. _____

13. _____

14. _____



Write each array as an addition problem and solve.



Answers

Ex. 3+3=6

1. 5+5+5+5=20

2. 2+2+2+2=8

3. 5+5+5=15

4. 3+3+3=9

5. 3+3+3+3+3=15

6. 4+4+4=12

7. 5+5+5+5+5=25

8. 4+4=8

9. 4+4+4+4=16

10. 3+3+3+3=12

11. 5+5=10

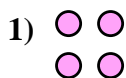
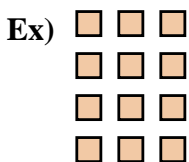
12. 2+2+2+2+2=10

13. 2+2=4

14. 2+2+2=6



Write each array as an addition problem and solve.



Answers

Ex. $3+3+3+3=12$

1. _____

2. _____

3. _____

4. _____

5. _____

6. _____

7. _____

8. _____

9. _____



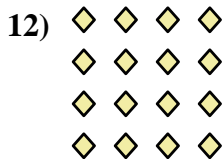
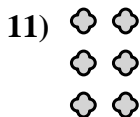
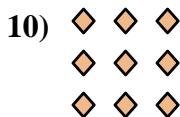


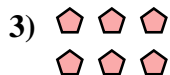
10. _____

11. _____

12. _____


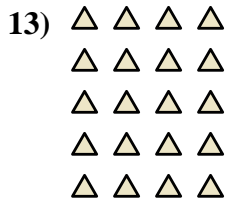
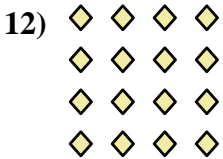
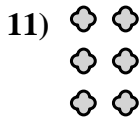
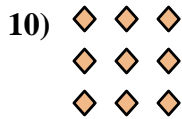
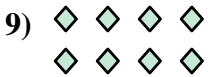


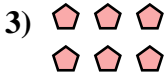
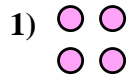
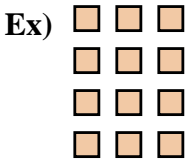
13. _____

14. _____





Write each array as an addition problem and solve.



Answers

Ex. $3+3+3+3=12$

1. $2+2=4$

2. $2+2+2+2+2=10$

3. $3+3=6$

4. $2+2+2+2=8$

5. $3+3+3+3+3=15$

6. $5+5+5+5=20$

7. $5+5+5=15$

8. $5+5+5+5+5=25$

9. $4+4=8$

10. $3+3+3=9$

11. $2+2+2=6$

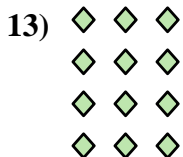
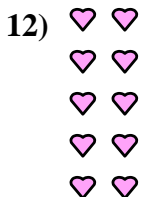
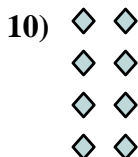
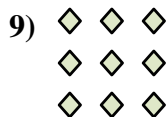


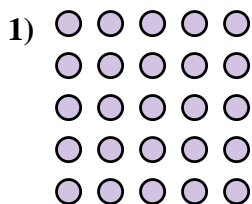
12. $4+4+4+4=16$

13. $4+4+4+4+4=20$

14. $4+4+4=12$



Write each array as an addition problem and solve.



Answers

Ex. $2+2=4$

1. _____

2. _____

3. _____

4. _____

5. _____

6. _____

7. _____

8. _____

9. _____

10. _____

11. _____

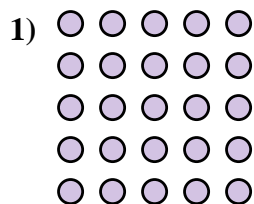
12. _____

13. _____

14. _____



Write each array as an addition problem and solve.



Answers

Ex. 2+2=4

1. 5+5+5+5+5=25

2. 3+3+3+3+3=15

3. 5+5+5=15

4. 3+3=6

5. 5+5=10

6. 4+4+4+4+4=20

7. 4+4+4+4=16

8. 5+5+5+5=20

9. 3+3+3=9

10. 2+2+2+2=8

11. 4+4=8

12. 2+2+2+2+2=10

13. 3+3+3+3=12

14. 4+4+4=12

